

Homework to be completed by Wednesday 17th April

Part A (everyone should do this section)

- Write the name of these 2D and 3D shapes?
(You are allowed to use the internet to help you!)

TIP - Search for 'BBC 3D Shapes' on the internet - watch the short videos.

Part B - 2D Shapes (have a go at this section if you feel confident)

- Add some angle information to the shapes (acute, right, obtuse, reflex)
- Label parallel and perpendicular where relevant.
- Identify any lines of symmetry.

Part C - 3D Shapes (Challenge)

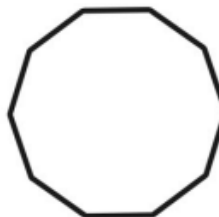
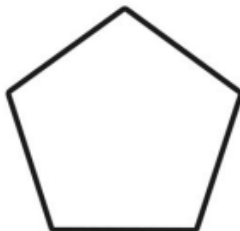
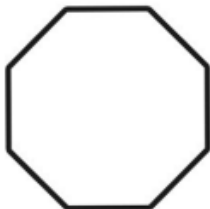
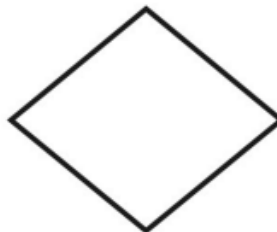
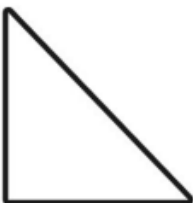
- Add the number of vertices and edges to the descriptions

TEST


There will be a test on Wednesday to check how well you remember these.

This week's spellings: 2B Week 4

Name the 2D Shape

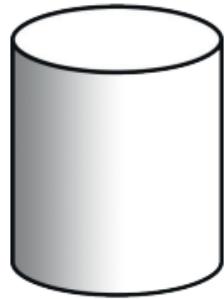


Name the 3D Shape



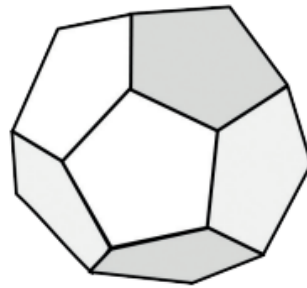
Number of faces _____

Name _____



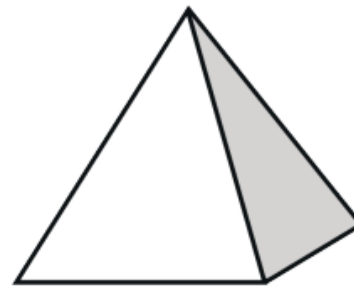
Number of faces _____

Name _____



Number of faces _____

Name _____



Number of faces _____

Name _____



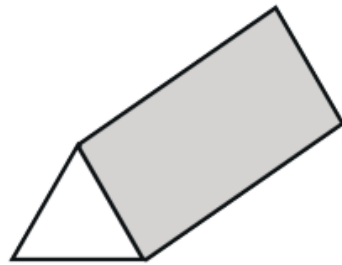
Number of faces _____

Name _____



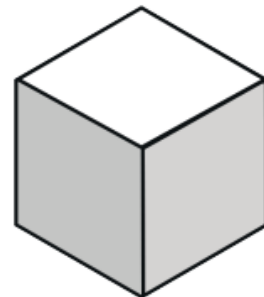
Number of faces _____

Name _____



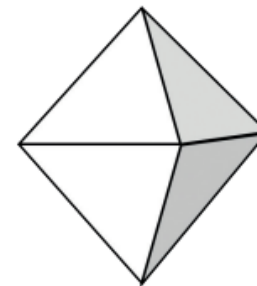
Number of faces _____

Name _____



Number of faces _____

Name _____



Number of faces _____

Name _____



Number of faces _____

Name _____